

INTELLIGENCE BUREAU

(Ministry of Home Affairs)

Government of India

Participant ID	
Application no	
Participant Name	
Test Center Name	
Test Date	18/01/2024
Test Time	2:30 PM - 3:30 PM
Subject	IB ACIO II Exe

Section : Current Affairs

- Q.1** Which of the following statement is /are INCORRECT about Nari Shakti Vandan Adhiniyam (Women's Reservation Bill)?
- The lower house of Parliament cleared the Nari Shakti Vandan Adhiniyam (Women's Reservation Bill) on September 20, 2023.
 - The Nari Shakti Vandan Adhiniyam (Women's Reservation Bill) was passed in the Rajya Sabha with 215 MPs voting in favour of the Bill on 21st September 2023.
 - The Bill was passed with majority voting by all the members of Rajya Sabha- 215 votes in favour and no one against it.
 - The bill grants 35 percent of seats to women in the Lok Sabha and state legislative assemblies.

Ans ☒ 1. 3 and 4 only
☒ 2. 1 and 4 only
☒ 3. 4 only
☒ 4. 1 and 2 only

Question ID : 630680558072
Option 1 ID : 6306802181259
Option 2 ID : 6306802181262
Option 3 ID : 6306802181260
Option 4 ID : 6306802181261
Status : Answered
Chosen Option : 1

Q.2 Which of following statement is /are INCORRECT about 37th Infantry Commanders' Conference?

- 1. 37th Infantry Commanders' Conference was successfully conducted on 14th and 15th December 2023 at Infantry School, Mhow.
- 2. This biennial conference was presided over by General Manoj Pande, Chief of the Army Staff.
- 3. A large number of current and futuristic issues pertaining to Infantry in operations, training, capability development and infusion of technology were discussed.

Ans ☒ 1. 1 only
☒ 2. 2 only
☒ 3. 1,2 and 3
☒ 4. 3 only

Question ID : 630680558049
Option 1 ID : 6306802181168
Option 2 ID : 6306802181167
Option 3 ID : 6306802181170
Option 4 ID : 6306802181169
Status : Answered
Chosen Option : 2

Q.3 Which of the following statement is/are True about the Google Gemini AI ?

- A. Gemini Ultra is the largest and most capable model for highly complex tasks.
- B. Gemini Pro is best model for scaling across a wide range of tasks.
- C. Gemini Nano is most efficient model for on-device tasks.

Ans ☒ 1. Neither A nor B nor C
☒ 2. B and C only
☒ 3. A, B and C
☒ 4. A and B only

Question ID : 630680558037
Option 1 ID : 6306802181122
Option 2 ID : 6306802181120
Option 3 ID : 6306802181121
Option 4 ID : 6306802181119
Status : Answered
Chosen Option : 3

Q.4 Which of the following statement is correct about National Games 2023?

- I. For the first time, National Games was held in Goa from 26 October 2023 to 9th November 2023 across five Goan cities.
- II. It is 38th National Games.

Ans ☒ 1. Only II
☒ 2. Only I
☒ 3. Both I and II
☒ 4. Neither I nor II

Question ID : 630680556623
Option 1 ID : 6306802175483
Option 2 ID : 6306802175482
Option 3 ID : 6306802175484
Option 4 ID : 6306802175485
Status : Answered
Chosen Option : 3

Q.5 Which of the following statement is/ are INCORRECT about chatbot 'Bal Mitra' for children launched in February 2023?

1. The Delhi Commission for Protection of Child Rights in February 2023 launched its Telegram chatbot called 'Bal Mitra'.
2. It enable two-way communication between people and the child rights panel.
3. It will be used to send customised nudge-based messages to parents, children, anganwadi workers, etc.
4. The chatbot's features include complaint registration, tracking complaint status, and seeking information on various child rights issues.

Ans ☒ 1. 3 and 4 only

☒ 2. 3 only

☒ 3. 1 and 2 only

☒ 4. 1 only

Question ID : 630680558065
Option 1 ID : 6306802181232
Option 2 ID : 6306802181234
Option 3 ID : 6306802181231
Option 4 ID : 6306802181233

Status : Answered

Chosen Option : 3

Q.6 Which of the following statement is correct about the Dadasaheb Phalke International film festival awards 2023?

I. The Kashmir Files wins the 'Best Film' award.

II. Anupam Kher received the award of most versatile actor of the year.

Ans ☒ 1. Only II

☒ 2. Only I

☒ 3. Neither I nor II

☒ 4. Both I and II

Question ID : 630680556690
Option 1 ID : 6306802175751
Option 2 ID : 6306802175750
Option 3 ID : 6306802175753
Option 4 ID : 6306802175752

Status : Answered

Chosen Option : 2

Q.7 Which are the following is/are INCORRECT about the Tri-Services Amphibious Exercise?

1. All three defense forces of India, the Army, the Navy, and the Air Force participated in AMPHEX 2023.
2. Tri-Services Amphibious Exercise, AMPHEX 2023 was conducted at Kakinada, Andhra Pradesh from 17 to 22 January 23.
3. The participating forces undertook complex exercises in all domains of amphibious operations over seven days.
4. Indian Army participated in the exercise with over 1100 troops which included Special Forces.

Ans ☒ 1. 3 and 4 only

☒ 2. 1 and 3 only

☒ 3. 2 and 4 only

☒ 4. 1,2 and 4 only

Question ID : 630680558055
Option 1 ID : 6306802181193
Option 2 ID : 6306802181192
Option 3 ID : 6306802181191
Option 4 ID : 6306802181194

Status : Answered

Chosen Option : 4

Q.8 On 21 October 2023 the Prime Minister, Shri Narendra Modi has lauded the successful launch of _____ TV D1 Test Flight and remarked that it takes the nation one step closer to realizing India's first human space flight program.

- Ans
- ☒ 1. Mission Chandrayaan 3
 - ☒ 2. Mission Mangalyaan 2
 - ☒ 3. Mission Aditya- L1
 - ☒ 4. Mission Gaganyaan

Question ID : 630680556628
Option 1 ID : 6306802175503
Option 2 ID : 6306802175504
Option 3 ID : 6306802175505
Option 4 ID : 6306802175502
Status : Answered
Chosen Option : 3

Q.9 In October 2023, Indian Institute of Science Education and Research Bhopal identified ciTRAN. Which of the following statement is/are CORRECT about this achievement?

1. IISER Bhopal identified a specific circular RNA (circRNA) called 'ciTRAN'
2. It plays a crucial role in multiplication of the AIDS-causing HIV-1 virus within the human body.
3. This research was led by Dr. Ajit Chande from Department of Biological Sciences IISER Bhopal.
4. ciTRAN helps the process of copying genetic information from the virus.

- Ans
- ☒ 1. 1 and 4 only
 - ☒ 2. 2 and 3 only
 - ☒ 3. 1 and 2 only
 - ☒ 4. 1,2,3 and 4

Question ID : 630680558044
Option 1 ID : 6306802181149
Option 2 ID : 6306802181148
Option 3 ID : 6306802181147
Option 4 ID : 6306802181150
Status : Answered
Chosen Option : 4

Q.10 Which of the following statements is / are CORRECT with regards to the report prepared by Climate Central about Climate Shift Index(CSI)?

1. Kerala, Puducherry and Andaman and Nicobar Islands experienced, more than three degrees higher temperatures, among the highest in the world, from June to August, 2023.
2. The report uses the Climate Shift Index (CSI) to compare observed or forecast temperatures to models that account for human-caused climate change.
3. It states that these regions witnessed more than 60 days at CSI level 3 or higher, indicating the impact of climate change.
4. Five Indian states had a summer average CSI above 3.

- Ans
- ☒ 1. 3,4 and 2
 - ☒ 2. 3 only
 - ☒ 3. 1,4 and 3
 - ☒ 4. 1,2,3 and 4

Question ID : 630680558084
Option 1 ID : 6306802181308
Option 2 ID : 6306802181310
Option 3 ID : 6306802181309
Option 4 ID : 6306802181307
Status : Answered
Chosen Option : 4

Q.11 Which of the following statement is/ are Incorrect about India vs Malaysia Hockey Highlights of the Asian Champions Trophy 2023?

1. India edged past Malaysia 2-1 in the final match of the Asian Champions Trophy 2023 at Mayor Radhakrishnan Hockey Stadium on Saturday 12th August 2023.
2. Harmanpreet Singh and Gurjant Singh scored a goal each inside one minute in the third quarter to help India make a memorable comeback.
3. Akashdeep Singh's field goal in the final quarter put India in lead against Malaysia and eventually sealed the game for the side.

Ans ☒ 1. 2 only
☒ 2. 1 only
☒ 3. 3 only
☒ 4. 1, 2 and 3

Question ID : 630680558033
Option 1 ID : 6306802181104
Option 2 ID : 6306802181103
Option 3 ID : 6306802181105
Option 4 ID : 6306802181106
Status : Answered
Chosen Option : 2

Q.12 Which of the following statement is correct about World Meteorological Day 2023?

- I. World Meteorological Day 2023 will focus on the theme, 'The Future of Weather, Climate and Water across Generations'.
- II. Every 23 March, World Meteorological Day commemorates the coming into force of the Convention establishing the World Meteorological Organization (WMO) on 23 March 1950.

Ans ☒ 1. Only II
☒ 2. Only I
☒ 3. Both I and II
☒ 4. Neither I nor II

Question ID : 630680556614
Option 1 ID : 6306802175447
Option 2 ID : 6306802175446
Option 3 ID : 6306802175448
Option 4 ID : 6306802175449
Status : Answered
Chosen Option : 3

Q.13 Which of the following institution has developed a new Decision Support System (DSS) and extended the ability of the existing air quality early warning system (AQEWS) to have decision-making capability for air quality management in Delhi - NCR region in October 2021?

Ans ☒ 1. Indian Institute of Tropical Meteorology
☒ 2. Indian Institute of Technology Delhi
☒ 3. Indian Institute of Technology Bangalore
☒ 4. Indian Institute of Technology Madras

Question ID : 630680556670
Option 1 ID : 6306802175673
Option 2 ID : 6306802175670
Option 3 ID : 6306802175672
Option 4 ID : 6306802175671
Status : Answered
Chosen Option : 2

Q.14 Which of the following is/are CORRECT statement(s) about first hydrogen combustion-driven heavy-duty truck?

1. Mukesh Ambani-run Reliance Industries Limited (RIL) and Ashok Leyland unveiled India's first Hydrogen Internal Combustion Engine (H2-ICE) powered heavy-duty truck on in February 2023.
2. The Ashok Leyland H2-ICE truck range is powered by Hydrogen, maintaining overall architecture similar to a conventional diesel-based combustion engine.

Ans ☒ 1. 2 only
☒ 2. Neither 1 nor 2
☒ 3. Both 1 and 2
☒ 4. 1 only

Question ID : 630680558080
Option 1 ID : 6306802181292
Option 2 ID : 6306802181294
Option 3 ID : 6306802181293
Option 4 ID : 6306802181291
Status : Answered
Chosen Option : 3

Q.15 Indian National Congress – INC won 35 seats out of _____ in general election to assembly constituencies of Chhattisgarh 2023.

Ans ☒ 1. 90
☒ 2. 85
☒ 3. 75
☒ 4. 80

Question ID : 630680556648
Option 1 ID : 6306802175585
Option 2 ID : 6306802175584
Option 3 ID : 6306802175582
Option 4 ID : 6306802175583
Status : Answered
Chosen Option : 1

Q.16 Tele-Law 2.0 initiative was launched on 25 August 2023 marking an important chapter in the evolution of the Tele-Law program of the Department of Justice, Ministry of Law and Justice. This ground-breaking program, operating under the _____.

Ans ☒ 1. SANKALP scheme
☒ 2. PM-JAY scheme
☒ 3. DISHA Scheme
☒ 4. NISTHA scheme

Question ID : 630680556637
Option 1 ID : 6306802175538
Option 2 ID : 6306802175541
Option 3 ID : 6306802175539
Option 4 ID : 6306802175540
Status : Answered
Chosen Option : 2

Q.17 Which of the following statement is/are CORRECT about Madras High Court decision of February 2023 regarding Domestic violence case?

1. Any woman residing in India either temporarily or permanently is entitled to seek relief from a court of law under the Domestic Violence Act even if her spouse lives outside the country.
2. The court said that the cause of action arises in India since the aggrieved person is residing here, even if abused economically by the spouse residing in another country.

Ans ☒ 1. 1 only
☒ 2. 2 only
☒ 3. Both 1 and 2
☒ 4. Neither 1 nor 2.

Question ID : **630680558062**
Option 1 ID : **6306802181220**
Option 2 ID : **6306802181221**
Option 3 ID : **6306802181219**
Option 4 ID : **6306802181222**
Status : **Answered**
Chosen Option : **3**

Q.18 In May 2023, online platform 'Naykap Gokab' launched in _____ aiming to promote local innovative ideas, solutions.

Ans ☒ 1. Bangladesh
☒ 2. Bhutan
☒ 3. Pakistan
☒ 4. Myanmar

Question ID : **630680556601**
Option 1 ID : **6306802175395**
Option 2 ID : **6306802175394**
Option 3 ID : **6306802175397**
Option 4 ID : **6306802175396**
Status : **Answered**
Chosen Option : **1**

Q.19 The _____ edition of HUN- a Thadou Cultural Festival 2023 held at Thomas Ground in Kangpokpi district of Manipur.

Ans ☒ 1. 7th
☒ 2. 2nd
☒ 3. 5th
☒ 4. 3rd

Question ID : **630680556682**
Option 1 ID : **6306802175721**
Option 2 ID : **6306802175718**
Option 3 ID : **6306802175720**
Option 4 ID : **6306802175719**
Status : **Answered**
Chosen Option : **1**

Q.20 Strengthening Teaching-Learning and Results for States (STARS) Project was approved by the Cabinet in October 2020, to be implemented as a centrally sponsored scheme. Which of the following statement is correct about STARS project?

I. After signing of the Loan Agreement, the STARS Project became effective on 23rd February 2021 for a period of five years i.e. up to FY: 2024-25.

II. The STARS Project is being implemented in six identified States viz. Himachal Pradesh, Maharashtra, Odisha, Rajasthan, Madhya Pradesh and Kerala.

- Ans ☒ 1. Both I and II
 ☒ 2. Neither I nor II
 ☒ 3. Only II
 ☒ 4. Only I

Question ID : 630680556660
Option 1 ID : 6306802175632
Option 2 ID : 6306802175633
Option 3 ID : 6306802175631
Option 4 ID : 6306802175630
Status : Answered
Chosen Option : 3

Section : General Studies

Q.1 Which of the following strait separated Sri Lanka from India?

- Ans ☒ 1. Strait of Malacca
 ☒ 2. Palk strait
 ☒ 3. Bering Strait
 ☒ 4. Strait of Tartary

Question ID : 630680557510
Option 1 ID : 6306802179100
Option 2 ID : 6306802179099
Option 3 ID : 6306802179101
Option 4 ID : 6306802179102
Status : Answered
Chosen Option : 2

Q.2 RBI publishes figures for four alternative measures of money supply, viz. M1, M2, M3 and M4. In this context which of the following is called as narrow money?

- Ans ☒ 1. M3 and M4
 ☒ 2. M1 and M2
 ☒ 3. M2 and M4
 ☒ 4. M1 and M3

Question ID : 630680557517
Option 1 ID : 6306802179128
Option 2 ID : 6306802179129
Option 3 ID : 6306802179130
Option 4 ID : 6306802179127
Status : Answered
Chosen Option : 2

Q.3 Which of the following were part of the 'Four Modernizations' in China in 1978?

1. Agriculture
2. Industry
3. Science and Technology
4. Democracy

Ans ☒ 1. Only 1 and 2
☒ 2. Only 1, 2 and 3
☒ 3. Only 1, 3 and 4
☒ 4. Only 3 and 4

Question ID : **630680557428**
Option 1 ID : **6306802178767**
Option 2 ID : **6306802178768**
Option 3 ID : **6306802178769**
Option 4 ID : **6306802178770**
Status : **Answered**
Chosen Option : **2**

Q.4 Which of the following statement is correct about, industry and trade?

- I. Economists have found that poor nations can progress if they have a good industrial sector.
II. Agriculture provides employment which is more stable than the employment in industry.

Ans ☒ 1. Both I and II
☒ 2. Only II
☒ 3. Neither I nor II
☒ 4. Only I

Question ID : **630680557527**
Option 1 ID : **6306802179169**
Option 2 ID : **6306802179168**
Option 3 ID : **6306802179170**
Option 4 ID : **6306802179167**
Status : **Answered**
Chosen Option : **4**

Q.5 Which of the following statements are correct about general elections to the Lok Sabha?

1. Each Parliamentary Constituency will elect only one member.
2. Prior to 1962, there were both single-member and multi member constituencies. These multi- member constituencies used to elect more than one member.
3. The first general election was held in India during 1951–1952.
4. The total strength of Lok Sabha at the time of first general election was 543.

Ans ☒ 1. Only 1, 2 and 3
☒ 2. Only 1 and 2
☒ 3. Only 1, 2 and 4
☒ 4. Only 1, 3 and 4

Question ID : **630680557440**
Option 1 ID : **6306802178816**
Option 2 ID : **6306802178817**
Option 3 ID : **6306802178815**
Option 4 ID : **6306802178818**
Status : **Answered**
Chosen Option : **4**

Q.6 Match the following in the context of land categories under the Chola dynasty.

List I	List II
A. Brahmadeya	1. Land gifted to temples
B. Tirunamattukkani / Devadana	2. Land of non-Brahmana peasant proprietors
C. Vellanvagai	3. Land gifted to Brahmanas

Ans ☒ 1. A-3, B-2, C-1

☒ 2. A-3, B-1, C-2

☒ 3. A-2, B-1, C-3

☒ 4. A-2, B-3, C-1

Question ID : 630680557394

Option 1 ID : 6306802178631

Option 2 ID : 6306802178633

Option 3 ID : 6306802178632

Option 4 ID : 6306802178634

Status : Answered

Chosen Option : 2

Q.7 Which of the following committees was/were set up by the government for local bodies in India?

1. Balwant Rai Mehta Committee
2. The Ashok Mehta Committee
3. Khusro Committee

Ans ☒ 1. Only 1

☒ 2. Only 2 and 3

☒ 3. Only 1 and 2

☒ 4. Only 3

Question ID : 630680557444

Option 1 ID : 6306802178831

Option 2 ID : 6306802178834

Option 3 ID : 6306802178832

Option 4 ID : 6306802178833

Status : Answered

Chosen Option : 4

Q.8 Consider the following statements regarding Jainism.

1. 24 Tirthankaras were responsible for the origin and development of the Jain religion and philosophy.
2. The Jains too do not believe in the Vedas, but they admit the existence of a soul.
3. The 22nd Tirthankara was Parsvanatha. The followers of Parsvanatha wore a white garment.
4. The 24th Tirthankara was Vardhamana Mahavira.

Select all the statements that are true.

- Ans**
- ☒ 1. 1 and 2 only
 - ☒ 2. 2 and 3 only
 - ☒ 3. 1, 3 and 4 only
 - ☒ 4. 1, 2 and 4 only

Question ID : 630680557408

Option 1 ID : 6306802178687

Option 2 ID : 6306802178688

Option 3 ID : 6306802178690

Option 4 ID : 6306802178689

Status : **Answered**

Chosen Option : 3

Q.9 Which of the following rivers rise from the Eastern Ghats?

1. Hemavathi
2. Nagavali
3. Malaprabha
4. Vamsadhara

- Ans**
- ☒ 1. 1 and 2 only
 - ☒ 2. 1 and 3 only
 - ☒ 3. 3 and 4 only
 - ☒ 4. 2 and 4 only

Question ID : 630680557420

Option 1 ID : 6306802178735

Option 2 ID : 6306802178738

Option 3 ID : 6306802178737

Option 4 ID : 6306802178736

Status : **Answered**

Chosen Option : 2

Q.10 Which of the following can be regarded as element of weather and climate?

I. Temperature

II. Precipitation

- Ans** ☒ 1. Only II
☒ 2. Neither I nor II
☒ 3. Both I and II
☒ 4. Only I

Question ID : 630680557495
Option 1 ID : 6306802179040
Option 2 ID : 6306802179042
Option 3 ID : 6306802179041
Option 4 ID : 6306802179039
Status : Answered
Chosen Option : 3

Q.11 Historians have used which of the following sources to reconstruct the history of the Mauryan Empire?

I. The account of Megasthenes (a Greek ambassador to the court of Chandragupta Maurya), which survives in fragments.

II. The Arthashastra, parts of which were probably composed by Kautilya or Chanakya.

- Ans** ☒ 1. Only I
☒ 2. Both I and II
☒ 3. Only II
☒ 4. Neither I nor II

Question ID : 630680557468
Option 1 ID : 6306802178931
Option 2 ID : 6306802178933
Option 3 ID : 6306802178932
Option 4 ID : 6306802178934
Status : Answered
Chosen Option : 2

Q.12 In the context of five year plans, Which of the following can be regarded as basic objective of planning in India?

I. A sizeable increase in the national income so as to raise the level of living in the country.

II. Reduction of inequalities in income and wealth and a more even distribution of economic power.

- Ans** ☒ 1. Only II
☒ 2. Only I
☒ 3. Both I and II
☒ 4. Neither I nor II

Question ID : 630680557526
Option 1 ID : 6306802179164
Option 2 ID : 6306802179163
Option 3 ID : 6306802179165
Option 4 ID : 6306802179166
Status : Answered
Chosen Option : 3

Q.13 Which of the following statement is correct about Ellora caves?

I. Ellora caves consists only 24 monasteries and temples, extending over more than 2 km.

II. It illustrates the spirit of tolerance that was characteristic of ancient India.

Ans ☒ 1. Neither I nor II

☒ 2. Only I

☒ 3. Both I and II

☒ 4. Only II

Question ID : 630680557492

Option 1 ID : 6306802179030

Option 2 ID : 6306802179027

Option 3 ID : 6306802179029

Option 4 ID : 6306802179028

Status : Answered

Chosen Option : 3

Q.14 Which of the following statements are correct with reference to the GOBARdhan Scheme?

Statement 1: GOBARdhan scheme is being pursued as a national programme priority under Swachh Bharat Mission Grameen-Phase II.

Statement 2: Department of Rural Development, Ministry of Rural Development is the Nodal department for the scheme.

Statement 3: Department of Drinking Water and Sanitation supports every district with technical assistance and financial support of up to ₹50 lakh per district.

Ans ☒ 1. Only 3

☒ 2. Only 1 and 3

☒ 3. Only 1

☒ 4. Only 1 and 2

Question ID : 630680557423

Option 1 ID : 6306802178749

Option 2 ID : 6306802178750

Option 3 ID : 6306802178747

Option 4 ID : 6306802178748

Status : Answered

Chosen Option : 4

Q.15 Which of the following statements are correct regarding the Hunters Commission of 1882?

1. It was made to review the progress made in the field of education following Wood's Dispatch.
2. It laid special emphasis on primary education whose control ought to be transferred to district and municipal boards.
3. It underlined the need to provide adequate facilities for spread of women education outside the presidency towns.
4. Private initiative in the field of education should not be encouraged.

Ans ☒ 1. 1 and 2 only

☒ 2. 1, 2 and 3

☒ 3. 2 and 3 only

☒ 4. 3 and 4 only

Question ID : 630680557389

Option 1 ID : 6306802178611

Option 2 ID : 6306802178612

Option 3 ID : 6306802178613

Option 4 ID : 6306802178614

Status : Answered

Chosen Option : 2

Q.16 Which of the following Article of Indian constitution explains the office of the comptroller and Auditor General of India?

- Ans
- ☐ 1. Article 165
 - ☐ 2. Article 125
 - ☐ 3. Article 368
 - ☒ 4. Article 148

Question ID : 630680557543
Option 1 ID : 6306802179232
Option 2 ID : 6306802179233
Option 3 ID : 6306802179234
Option 4 ID : 6306802179231
Status : Answered
Chosen Option : 4

Q.17 In context of panchvrata in Jainism, which of the following means non-stealing?

- Ans
- ☐ 1. Aparigraha
 - ☐ 2. Brahmacharaya
 - ☐ 3. Ahimsa
 - ☒ 4. Astheya

Question ID : 630680557481
Option 1 ID : 6306802178986
Option 2 ID : 6306802178985
Option 3 ID : 6306802178983
Option 4 ID : 6306802178984
Status : Answered
Chosen Option : 1

Q.18 Which of the following languages is/are spoken in Meghalaya?

- 1) Kokborok
- 2) Garo
- 3) Khasi

- Ans
- ☒ 1. 2 and 3 only
 - ☐ 2. 1 and 2 only
 - ☐ 3. 1, 2 and 3
 - ☐ 4. 1 and 3 only

Question ID : 630680557403
Option 1 ID : 6306802178668
Option 2 ID : 6306802178667
Option 3 ID : 6306802178670
Option 4 ID : 6306802178669
Status : Answered
Chosen Option : 1

Q.19 Who among the following is ex-officio chairman of Council of State of India?

- Ans** ☒ 1. Vice- President
☐ 2. Governor
☐ 3. President
☐ 4. Prime Minister

Question ID : 630680557550
Option 1 ID : 6306802179260
Option 2 ID : 6306802179262
Option 3 ID : 6306802179259
Option 4 ID : 6306802179261
Status : Answered
Chosen Option : 1

Q.20 _____ a Rashtrakuta chief overthrew his Chalukya overlord and performed a ritual called hiranya-garbha (literally, the golden womb).

- Ans** ☒ 1. Dantidurga
☐ 2. Rajendra
☐ 3. Nagbhatta
☐ 4. Rajraja

Question ID : 630680557459
Option 1 ID : 6306802178895
Option 2 ID : 6306802178897
Option 3 ID : 6306802178898
Option 4 ID : 6306802178896
Status : Answered
Chosen Option : 3

Section : Numerical Aptitude

Q.1 If a 9-digit number $9834x97y4$ is divisible by 88, then what is the maximum possible value of $(3x + 2y)$?

- Ans** ☒ 1. 34
☐ 2. 27
☐ 3. 31
☐ 4. 37

Question ID : 630680557577
Option 1 ID : 6306802179369
Option 2 ID : 6306802179367
Option 3 ID : 6306802179368
Option 4 ID : 6306802179370
Status : Answered
Chosen Option : 1

Q.2 Two numbers are in the ratio of 8 : 3. If their sum is 11, then what is the sum of the squares of the two numbers?

- Ans**
- ☒ 1. 93
 - ☒ 2. 63
 - ☒ 3. 73
 - ☒ 4. 83

Question ID : 630680557716

Option 1 ID : 6306802179925

Option 2 ID : 6306802179926

Option 3 ID : 6306802179923

Option 4 ID : 6306802179924

Status : Answered

Chosen Option : 3

Q.3 Neeraj sells sarees for ₹3,944 each, after giving two successive discounts of 15% and 20% on its marked price. If he sells a saree giving no discount on its marked price, then he earns a profit of 45%. If he sells a saree for ₹4,496, then his profit percentage will be _____.

- Ans**
- ☒ 1. 12%
 - ☒ 2. 12.4 %
 - ☒ 3. 15.6%
 - ☒ 4. 15%

Question ID : 630680557596

Option 1 ID : 6306802179443

Option 2 ID : 6306802179444

Option 3 ID : 6306802179446

Option 4 ID : 6306802179445

Status : Answered

Chosen Option : 2

Q.4 $\frac{1}{6}$ of a certain sum is lent at 36 percent rate of interest, $\frac{1}{5}$ of the remaining sum is lent at 42 percent rate of interest. The remaining sum is lent at 18 percent rate of interest. If the simple interest received on the total sum for 3 years is ₹1725, then what is the sum?

- Ans**
- ☒ 1. ₹2300
 - ☒ 2. ₹2400
 - ☒ 3. ₹2100
 - ☒ 4. ₹2200

Question ID : 630680557666

Option 1 ID : 6306802179725

Option 2 ID : 6306802179724

Option 3 ID : 6306802179723

Option 4 ID : 6306802179726

Status : Not Answered

Chosen Option : --

Q.5 15% of A = 20% of B = 25% of C and $A + B + C = 5640$. A is decreased by $58\frac{1}{3}\%$, B is increased by 20% and C is decreased by 30%.

Statement I: The new value of C is 8% more than the new value of A.

Statement II: The new value of B is 10% less than the initial value of A.

Which of the above statements is/are correct?

- Ans** ☒ 1. II only
☐ 2. Neither I nor II
☐ 3. Both I and II
☐ 4. I only

Question ID : 630680557591

Option 1 ID : 6306802179424

Option 2 ID : 6306802179426

Option 3 ID : 6306802179425

Option 4 ID : 6306802179423

Status : Not Answered

Chosen Option : --

Q.6 Simple interest on a sum for eight months at the rate of 8 percent per annum is ₹480. What is the value of sum?

- Ans** ☐ 1. ₹10500
☐ 2. ₹7500
☒ 3. ₹9000
☐ 4. ₹12000

Question ID : 630680557657

Option 1 ID : 6306802179689

Option 2 ID : 6306802179687

Option 3 ID : 6306802179690

Option 4 ID : 6306802179688

Status : Answered

Chosen Option : 3

Q.7 Which of the following statements is/are correct?

(a) The sum $1^3 + 2^3 + 3^3 + \dots$ to ten terms, lies between 3020 and 3030.

(b) If x is subtracted from the sum $1^3 + 3^3 + 5^3 + \dots$ to 10 terms, then it becomes a square. The least value of x is 17.

(c) $11^3 + 12^3 + 13^3 + \dots + 20^3 = 41075$.

- Ans** ☐ 1. (a) and (b)
☐ 2. (a) only
☒ 3. (a) and (c)
☐ 4. (b) only

Question ID : 630680557585

Option 1 ID : 6306802179401

Option 2 ID : 6306802179399

Option 3 ID : 6306802179402

Option 4 ID : 6306802179400

Status : Not Answered

Chosen Option : --

Q.8 Pawan purchased two tables, first for ₹10000 and the second for ₹12000. He sold both the tables, first one at the profit of 10 percent and the second at a loss of 20 percent. What is the overall profit or loss?

- Ans ☒ 1. Profit = ₹1200
☒ 2. Loss = ₹1400
☒ 3. Profit = ₹1400
☒ 4. Loss = ₹1200

Question ID : 630680557702
Option 1 ID : 6306802179869
Option 2 ID : 6306802179868
Option 3 ID : 6306802179867
Option 4 ID : 6306802179870
Status : Answered
Chosen Option : 2

Q.9 Select the option that is true regarding the following labelled Assertion (A) and Reason (R).

Assertion (A)	Reason (R)
The cost of 5 pens, 6 erasers and 7 notebooks is ₹340 and the cost of 6 pens, 4 erasers and 2 notebooks is ₹200. The cost of one pen, one eraser and 1 notebook is ₹55.	Let x, y and z denote the cost of 1 pen, 1 eraser and 1 notebook, respectively. $5x + 6y + 7z = 340$ and $6x + 4y + 2z = 200$.

- Ans ☒ 1. Both A and R are true and R is a correct explanation of A.
☒ 2. A is false and R is true.
☒ 3. A is true and R is false.
☒ 4. Both A and R are true but R is not a correct explanation of A.

Question ID : 630680560597
Option 1 ID : 6306802191380
Option 2 ID : 6306802191383
Option 3 ID : 6306802191382
Option 4 ID : 6306802191381
Status : Answered
Chosen Option : 1

Q.10 Two sums of money are divided between A, B, C and D. The first sum is divided between them in the ratio 4 : 6 : 3 : 2 and the second sum is divided in the ratio 3 : 4 : 7 : 6. The second sum is two times the first sum. Who will get the second largest overall share?

- Ans ☒ 1. B
☒ 2. D
☒ 3. A
☒ 4. C

Question ID : 630680557607
Option 1 ID : 6306802179488
Option 2 ID : 6306802179490
Option 3 ID : 6306802179487
Option 4 ID : 6306802179489
Status : Answered
Chosen Option : 4

Q.11 What is the value of $\frac{58.32}{0.27 \times 0.09}$?

- Ans
- ☐ 1. 24
 - ☒ 2. 2400
 - ☐ 3. 240
 - ☐ 4. 24000

Question ID : 630680557672
Option 1 ID : 6306802179750
Option 2 ID : 6306802179748
Option 3 ID : 6306802179749
Option 4 ID : 6306802179747
Status : Answered
Chosen Option : 2

Q.12 A person leaves city J at 7 am and reaches city K at 5 pm. Another person leaves from city K at 4 pm and reaches city J at 10 pm. At what time (approximately) they both will meet?

- Ans
- ☐ 1. 4:13 pm
 - ☐ 2. 4:37 pm
 - ☐ 3. 4:52 pm
 - ☒ 4. 4:23 pm

Question ID : 630680557723
Option 1 ID : 6306802179952
Option 2 ID : 6306802179951
Option 3 ID : 6306802179953
Option 4 ID : 6306802179954
Status : Not Answered
Chosen Option : --

Q.13 The average of 11 consecutive odd numbers is 37. What is the difference between the largest number and the smallest number?

- Ans
- ☐ 1. 21
 - ☐ 2. 23
 - ☒ 3. 20
 - ☐ 4. 25

Question ID : 630680557639
Option 1 ID : 6306802179618
Option 2 ID : 6306802179617
Option 3 ID : 6306802179616
Option 4 ID : 6306802179615
Status : Answered
Chosen Option : 3

Q.14 When 85 percent of a number is added to 18, then the result is that number only. What is the value of the number?

- Ans
- ☒ 1. 105
 - ☒ 2. 135
 - ☒ 3. 120
 - ☒ 4. 150

Question ID : 630680557680
Option 1 ID : 6306802179782
Option 2 ID : 6306802179780
Option 3 ID : 6306802179779
Option 4 ID : 6306802179781
Status : Answered
Chosen Option : 3

Q.15 A question is given, followed by three statements labelled I, II and III. Identify which of the statements is/are sufficient to answer the question.

Question:

What is the daily wages (in ₹) of one worker of type A?

Statements:

- I. In a factory, the ratio of the number of workers of type A, B and C is 9 : 4 : 1 and the ratio of daily wages of one worker of type A, B and C is 8 : 5 : 3. Total daily wages of all workers of type A, B and C is ₹57,000.
- II. The number of workers of type B is 20.
- III. The number of workers of type C is 5.

- Ans
- ☒ 1. I and II or I and III
 - ☒ 2. I only
 - ☒ 3. I and II only
 - ☒ 4. I, II and III

Question ID : 630680557612
Option 1 ID : 6306802179509
Option 2 ID : 6306802179507
Option 3 ID : 6306802179508
Option 4 ID : 6306802179510
Status : Answered
Chosen Option : 2

Q.16 A question is given, followed by three statements labelled I, II and III. Identify which of the statements is/are sufficient to answer the question.

Question:

How much time (in hours) will a boat take to go 25 km downstream?

Statements:

- I. The time taken by the boat to go a certain distance downstream is $\frac{7}{10}$ of the time taken by it to go the same distance in still water.
- II. The boat takes 6 hours to go 49 km downstream and 14 km upstream.
- III. The ratio of the speed of the boat in still water and the speed of the current is 7 : 3.

- Ans
- ☒ 1. I and III only
 - ☒ 2. I and II only
 - ☒ 3. II and III only
 - ☒ 4. I and II or II and III

Question ID : 630680557626
Option 1 ID : 6306802179564
Option 2 ID : 6306802179563
Option 3 ID : 6306802179565
Option 4 ID : 6306802179566
Status : Answered
Chosen Option : 1

Q.17 The average weight of some children in a group is 45 kg. When 10 children of average weight 40 kg leave the group or 15 children of average weight 50 kg join the group, the average weight of children in both the cases is the same. The number of children, initially, in the group lies between:

- Ans** ☒ 1. 55 and 65
☐ 2. 45 and 55
☐ 3. 35 and 45
☐ 4. 65 and 75

Question ID : 630680557566

Option 1 ID : 6306802179325

Option 2 ID : 6306802179324

Option 3 ID : 6306802179323

Option 4 ID : 6306802179326

Status : Not Answered

Chosen Option : --

Q.18 If $x^2 + \frac{1}{x^2} = 14$, then what is the value of $x^3 + \frac{1}{x^3}$? ($x > 0$)

- Ans** ☐ 1. 42
☒ 2. 52
☐ 3. 48
☐ 4. 50

Question ID : 630680557732

Option 1 ID : 6306802179990

Option 2 ID : 6306802179987

Option 3 ID : 6306802179989

Option 4 ID : 6306802179988

Status : Answered

Chosen Option : 2

Q.19 Income of Pawan is 5 percent more than the income of Pankaj and income of Pankaj is 15 percent more than the income of Manjeet. The income of Manjeet is (approximately) how much percentage less than the income of Pawan?

- Ans** ☐ 1. 7 percent
☒ 2. 17 percent
☐ 3. 3 percent
☐ 4. 10 percent

Question ID : 630680557694

Option 1 ID : 6306802179837

Option 2 ID : 6306802179835

Option 3 ID : 6306802179838

Option 4 ID : 6306802179836

Status : Answered

Chosen Option : 2

Q.20 A can complete a certain work in 30 days. B is 20% more efficient than A. C can complete $\frac{2}{5}$ part of the same work in 8 days. A and B together complete $\frac{11}{15}$ part of the work. The remaining work is completed by A and C together. In how many days was the entire work completed?

- Ans**  1. 13
-  2. $13\frac{1}{5}$
-  3. $14\frac{2}{5}$
-  4. 14

Question ID : 630680557617
Option 1 ID : 6306802179529
Option 2 ID : 6306802179530
Option 3 ID : 6306802179528
Option 4 ID : 6306802179527
Status : Answered
Chosen Option : 2

Section : Reasoning and Logical Aptitude

Q.1 In this question, a question is followed by two statements numbered (I) and (II). You have to decide whether the data provided in the statements are sufficient to answer the question. Read both the statements and decide the appropriate answer.

Q. A, B, C and D are four person of a family. How is C related to A?

(I) A is B's father's nephew, and C is B's cousin but not the brother of A.

(II) C is B's father's nephew, and D is B's cousin but not the brother of A.

Ans  1.

Data in Statement II alone is sufficient to answer the question while data in statement I is not.

 2.

Data in statements I and II together are NOT sufficient to answer the question.

 3.

Data in Statement I alone is sufficient to answer the question while data in statement II is not.

 4.

Data in statements I and II together are necessary to answer the question.

Question ID : 630680556941
Option 1 ID : 6306802176676
Option 2 ID : 6306802176678
Option 3 ID : 6306802176675
Option 4 ID : 6306802176677
Status : Not Answered
Chosen Option : --

Q.2 P + Q means 'P is father of Q'
P - Q means 'P is mother of Q'
P × Q means 'P is daughter of Q'
P ÷ Q means 'P is son of Q'
Based on the above information, find out which of the given statements can be the reason/s behind the assertion made below if it is given that 'A ÷ B - C × D'
Assertion: A is brother of E?
Reason A: D ÷ E
Reason B: E - C

- Ans** ☒ 1. Only B is the reason behind the assertion
☒ 2. Only A is the reason behind the assertion
☒ 3. Neither A nor B is the reason behind the assertion
☒ 4. Both A and B are reasons behind the assertion

Question ID : 630680556928
Option 1 ID : 6306802176625
Option 2 ID : 6306802176624
Option 3 ID : 6306802176626
Option 4 ID : 6306802176623
Status : Answered
Chosen Option : 2

Q.3 In the following question, four letter pairs are given. The letters on left side of (–) is related to the letters on the right side of (–) with some Logic/Rule/Relation. Three are similar on basis of same Logic/Rule/Relation. Select the odd one out from the given alternatives.

- Ans** ☒ 1. BQ – JY
☒ 2. VK – DS
☒ 3. LA – TI
☒ 4. EI – MR

Question ID : 630680557327
Option 1 ID : 6306802178366
Option 2 ID : 6306802178365
Option 3 ID : 6306802178363
Option 4 ID : 6306802178364
Status : Answered
Chosen Option : 4

Q.4 Given below is a statement followed by possible reasons. Read the statement carefully and decide which one explains the event/observation/information given in the statement.

Statement - Artificial intelligence poses a greater threat to humanity than climate change.

- I. AI technology is bases of all development in human history.
II. AI technology could lead to the development of autonomous weapons, creating a risk of accidental or malicious use.
III. The potential for AI to surpass human intelligence raises ethical concerns about its control and decision-making power. years
IV. Advances in AI could exacerbate existing social inequalities, leaving many people jobless and without income.

- Ans** ☒ 1. Only II and III
☒ 2. Only I and II
☒ 3. Only II, III and IV
☒ 4. Only I and III

Question ID : 630680556950
Option 1 ID : 6306802176712
Option 2 ID : 6306802176711
Option 3 ID : 6306802176714
Option 4 ID : 6306802176713
Status : Not Answered
Chosen Option : --

Q.5 In the following question below are given some statements followed by some conclusions based on those statements. Taking the given statements to be true even if they seem to be at variance from commonly known facts. Read all the conclusions and then decide which of the given conclusion logically follows the given statements.

Statements:

I. Some K are P.

II. Some Z are K.

Conclusion:

I. Some Z are P.

II. Some K are Z.

Ans ☒ 1. Both conclusions I and II follows.

☒ 2. Only conclusion I follows.

☒ 3. Only conclusion II follows.

☒ 4. Neither conclusion follows.

Question ID : 630680557308

Option 1 ID : 6306802178289

Option 2 ID : 6306802178287

Option 3 ID : 6306802178288

Option 4 ID : 6306802178290

Status : Answered

Chosen Option : 3

Q.6 A series is given with one term missing. Select the correct alternative from the given ones that will complete the series.

LRMC, OUPF, RXSI, UAVL, ?

Ans ☒ 1. XRTS

☒ 2. XMRO

☒ 3. XDTO

☒ 4. XDYO

Question ID : 630680557333

Option 1 ID : 6306802178388

Option 2 ID : 6306802178390

Option 3 ID : 6306802178387

Option 4 ID : 6306802178389

Status : Answered

Chosen Option : 4

Q.7 In the following number-pairs, the second number is obtained by applying certain mathematical operations to the first number. Select the set in which the numbers are related in the same way as are the numbers of the following sets.

(NOTE: Operations should be performed on the whole numbers, without breaking down the numbers into its constituent digits. E.g. 13 – Operations on 13 such as adding / subtracting / multiplying etc. to 13 can be performed. Breaking down 13 into 1 and 3 and then performing mathematical operations on 1 and 3 is not allowed)

161, 23

203, 29

Ans ☒ 1. 410, 41

☒ 2. 200, 25

☒ 3. 320, 24

☒ 4. 224, 32

Question ID : 630680556968

Option 1 ID : 6306802176786

Option 2 ID : 6306802176783

Option 3 ID : 6306802176785

Option 4 ID : 6306802176784

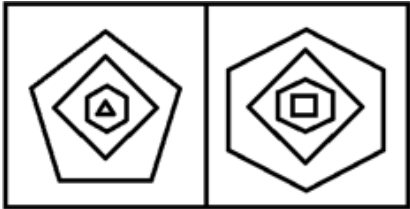
Status : Answered

Chosen Option : 4

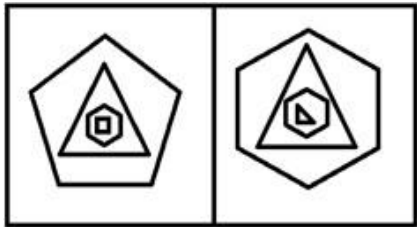
Q.8 Three of the following four figure pairs are alike in a certain way and thus form a group. Which is the one that does not belong to that group?

Ans

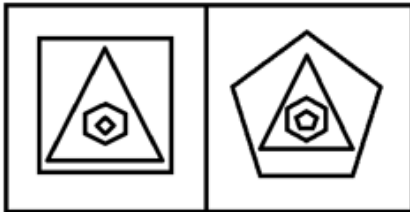
✗ 1.



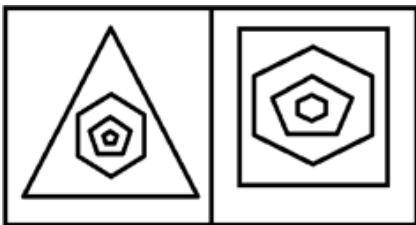
✓ 2.



✗ 3.



✗ 4.



Question ID : 630680556961
Option 1 ID : 6306802176755
Option 2 ID : 6306802176757
Option 3 ID : 6306802176756
Option 4 ID : 6306802176758

Status : Answered

Chosen Option : 4

Q.9 If a mirror is placed on the line AB, then out of the option figures which figure will be the right image of the question figure?



Ans

✓ 1.



✗ 2.



✗ 3.



✗ 4.



Question ID : 630680557356

Option 1 ID : 6306802178479

Option 2 ID : 6306802178482

Option 3 ID : 6306802178480

Option 4 ID : 6306802178481

Status : Answered

Chosen Option : 1

Q.10 After arranging the given words according to dictionary order, which word will come at 'Third' position?

1. Squire
2. Squib
3. Squeeze
4. Squirm
5. Squish

Ans

✗ 1. Squib

✗ 2. Squish

✗ 3. Squirm

✓ 4. Squire

Question ID : 630680557299

Option 1 ID : 6306802178251

Option 2 ID : 6306802178254

Option 3 ID : 6306802178252

Option 4 ID : 6306802178253

Status : Answered

Chosen Option : 4

Q.11 Six movies M1, M2, M3, M4, M5 and M6 are released in months from January to June. M1 is not the first or last movie to be released. M3 is released just before M4 and just after M5. 4 movies are released between M2 and M6. Only 1 movie is released after M4. Which movie is released in February?

- Ans** ☒ 1. M3
☒ 2. M5
☒ 3. M2
☒ 4. M1

Question ID : 630680557291
Option 1 ID : 6306802178222
Option 2 ID : 6306802178221
Option 3 ID : 6306802178219
Option 4 ID : 6306802178220

Status : Answered
Chosen Option : 4

Q.12 In the following question, select the missing number from the given series.

700, 697, 688, 661, 580, ?

- Ans** ☒ 1. 338
☒ 2. 350
☒ 3. 340
☒ 4. 337

Question ID : 630680557370
Option 1 ID : 6306802178537
Option 2 ID : 6306802178538
Option 3 ID : 6306802178535
Option 4 ID : 6306802178536

Status : Answered
Chosen Option : 4

Q.13 BE17 is related to DJ51 in a certain way. In the same way, GJ23 is related to NT69. Which of the following are correct matches following the same logic?

(i)	RU17	(W)	ZF69
(ii)	KN19	(X)	HN63
(iii)	DG21	(Y)	JP51
(iv)	MP23	(Z)	VB57

- Ans** ☒ 1. ii-W, iv-Z only
☒ 2. i-Y only
☒ 3. i-Y, ii-X, iii-W only
☒ 4. iii-Y , i-W only

Question ID : 630680556935
Option 1 ID : 6306802176653
Option 2 ID : 6306802176651
Option 3 ID : 6306802176652
Option 4 ID : 6306802176654

Status : Answered
Chosen Option : 2

Q.14 After interchanging which two numbers, the value of the given equation will be '37'?

$$9 \times 7 + 4 \div 1 - 6$$

- Ans** ☒ 1. 4 and 1
☒ 2. 9 and 6
☒ 3. 7 and 6
☒ 4. 9 and 4

Question ID : **630680557381**
Option 1 ID : **6306802178581**
Option 2 ID : **6306802178580**
Option 3 ID : **6306802178582**
Option 4 ID : **6306802178579**

Status : **Answered**

Chosen Option : **2**

Q.15 Read the following information about weight of 6 persons Pramod, Rahul, Fahad, Geeta, Anand and John who have different amount of money Rs. 500, Rs. 300, Rs. 450, Rs. 350, Rs. 600 and Rs. 550 but not necessarily in same order. The lightest have Rs.300 while heaviest have second highest amount of money. Fahad is lighter than Geeta who have Rs. 450. Anand is lighter than John but not as light as Geeta and Rahul. Pramod have Rs. 500. Fahad have highest amount of money. Pramod is lighter than Fahad but not the lightest.

Which of the following statement is true based on the above information?

- I. John is heaviest in all and have Rs. 550
II. Rahul have Rs. 300.

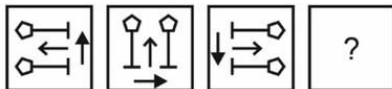
- Ans** ☒ 1. Only I
☒ 2. Neither I nor II
☒ 3. Both I and II
☒ 4. Only II

Question ID : **630680556920**
Option 1 ID : **6306802176591**
Option 2 ID : **6306802176594**
Option 3 ID : **6306802176593**
Option 4 ID : **6306802176592**

Status : **Not Answered**

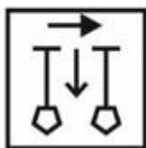
Chosen Option : **--**

Q.16 In the following question, select the figure which can be placed at the sign of question mark (?) from the given alternatives.

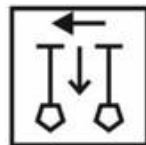


Ans

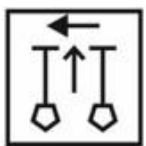
✗ 1.



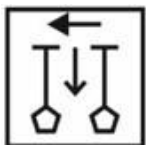
✓ 2.



✗ 3.



✗ 4.



Question ID : 630680557345

Option 1 ID : 6306802178436

Option 2 ID : 6306802178437

Option 3 ID : 6306802178435

Option 4 ID : 6306802178438

Status : Answered

Chosen Option : 2

Q.17 There are seven players Animesh, Baman, Charan, Danish, Sachin, Rahul, and Kapil each of them likes to play different games Cricket, Football, Badminton, Tennis, Shooting, Race, and Swimming but not necessarily in same order are sitting around a circular table. Each of them is either facing the center or facing outside (opposite to the center).

- There are exactly five persons facing towards outside direction such that all five are sitting together.
- Sachin is sitting between person who likes to play Football and Rahul.
- Animesh is sitting third to the right of person who likes to play shooting and Animesh is facing towards center.
- Danish who likes to play Race is sitting between Baman and Rahul.
- Rahul who likes to play shooting is sitting third to the left of Charan who likes to play Badminton.
- Baman who likes to play Tennis is sitting immediate left of Charan.
- Charan is facing towards center
- Sachin is not likes to play cricket.

Which of the following statement is / are true based on the given arrangement?

- Sachin likes to Play Race.
- Baman likes to play Tennis and facing towards center.
- Charan likes to play Badminton and facing towards center.

Ans

✓ 1. Only III is true.

✗ 2. Only II is true.

✗ 3. Only I is true.

✗ 4. All I, II and III are true.

Question ID : 630680556914

Option 1 ID : 6306802176569

Option 2 ID : 6306802176568

Option 3 ID : 6306802176567

Option 4 ID : 6306802176570

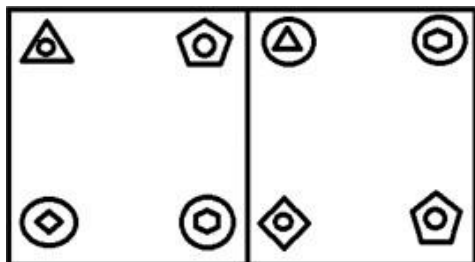
Status : Not Answered

Chosen Option : --

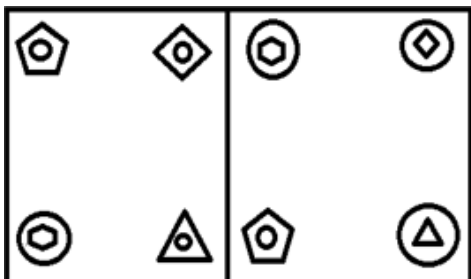
Q.18 Three of the following four figure pairs are alike in a certain way and thus form a group. Which is the one that does not belong to that group?

Ans

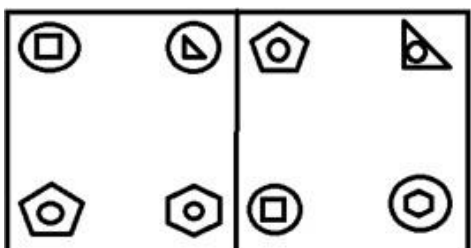
✓ 1.



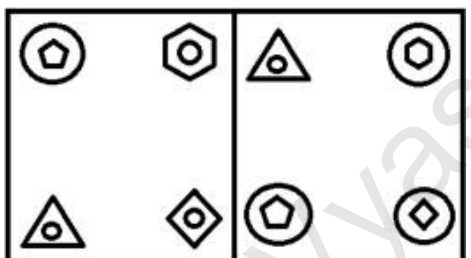
✗ 2.



✗ 3.



✗ 4.



Question ID : 630680556962

Option 1 ID : 6306802176762

Option 2 ID : 6306802176761

Option 3 ID : 6306802176760

Option 4 ID : 6306802176759

Status : Answered

Chosen Option : 2





Q.19 In the following question below are given some statements followed by some conclusions based on those statements. Taking the given statements to be true even if they seem to be at variance from commonly known facts. Read all the conclusions and then decide which of the given conclusion logically follows the given statements.

Statements:

- I. No P is A.
- II. Some S are A.

Conclusion:





- I. No A is P.
- II. Some S are P.

Ans  1. Both conclusions I and II follows.
 2. Only conclusion I follows.
 3. Neither conclusion follows.
 4. Only conclusion II follows.

Question ID : 630680557319
Option 1 ID : 6306802178333
Option 2 ID : 6306802178331
Option 3 ID : 6306802178334
Option 4 ID : 6306802178332
Status : Answered
Chosen Option : 2

Q.20 In a certain code language, 'WSZ' is written as '68' and 'HTUI' is written as '58'. Which of the following are correct matches as per the given code language?

WORD	CODE
I. DANCE	(W) 75
II. XZY	(X) 49
III. NGHT	(Y) 27

Ans  1. I-X only
 2. III-Y , I-W only
 3. I-Y, II-W, III-X only
 4. I-X , II-W only

Question ID : 630680556925
Option 1 ID : 6306802176613
Option 2 ID : 6306802176614
Option 3 ID : 6306802176612
Option 4 ID : 6306802176611
Status : Answered
Chosen Option : 3

Q.1 Match the following words with their antonyms.

	List I		List II
1	Witty	A	Dynamic
2	Torpid	B	Delight
3	Nuisance	C	Lame

- Ans ☒ 1. 1-B, 2-A, 3-C
☒ 2. 1-A, 2-B, 3-C
☒ 3. 1-C, 2-A, 3-B
☒ 4. 1-B, 2-C, 3-A

Question ID : 630680556845
Option 1 ID : 6306802176266
Option 2 ID : 6306802176263
Option 3 ID : 6306802176264
Option 4 ID : 6306802176265

Status : Answered
Chosen Option : 1

Q.2 Identify the grammatically correct form of the given sentence.

Sentence: At tomorrow's event, I would play the role of the heroine.

I. At tomorrow's event, I will play the role of the heroine.

II. At tomorrow's event, I will be play the role of the heroine in the play.

- Ans ☒ 1. Both I and II are correct
☒ 2. Neither I nor II is correct
☒ 3. Only I is correct
☒ 4. Only II is correct

Question ID : 630680556885
Option 1 ID : 6306802176425
Option 2 ID : 6306802176426
Option 3 ID : 6306802176423
Option 4 ID : 6306802176424

Status : Answered
Chosen Option : 3

Q.3 Select the option in which the word 'connoisseur' is used correctly.

- Ans ☒ 1. Only a connoisseur can tell the difference between a fake painting and an original painting.
☒ 2. A new connoisseur was posted to the town to bring order.
☒ 3. A connoisseur and a novice can be given the same job to control law and order.
☒ 4. Every thief is a connoisseur of sorts when it comes to escaping the law.

Question ID : 630680556730
Option 1 ID : 6306802175901
Option 2 ID : 6306802175899
Option 3 ID : 6306802175902
Option 4 ID : 6306802175900

Status : Answered
Chosen Option : 4

Q.4 The sentences given below are numbered 1, 2, 3, 4, and so on. They form a coherent paragraph when sequenced properly. Choose the option that gives the proper sequence.

1. Collective fear stimulates herd instinct, and tends to produce ferocity toward those not regarded as members of the herd.

2. And for this reason poltroons are more prone to cruelty and superstition than brave men.

3. Fear generates impulses of cruelty, and therefore promotes such superstitious beliefs that seem to justify cruelty.

4. So it was in the French Revolution, when fear of foreign armies produced the reign of terror.

5. Neither a man nor a crowd nor a nation can be expected to act humanely or think sanely when under the influence of a great fear.

Ans ✓ 1. 14352

✗ 2. 13542

✗ 3. 15432

✗ 4. 13245

Question ID : 630680556719
Option 1 ID : 6306802175856
Option 2 ID : 6306802175858
Option 3 ID : 6306802175857
Option 4 ID : 6306802175855
Status : Answered
Chosen Option : 4

Q.5 Identify the grammatically correct form of the given sentence.

Sentence: Hardly had I clean the floor when all the children had arrived in the hall.

I. Hardly had I cleaned the floor when all the children arrived in the hall.

II. Hardly had I clean the floor than all the children arrived in the hall.

III. Hardly had I clean the floor when all the children arriving in the hall.

Ans ✗ 1. Only I and II are correct

✗ 2. Only II and III are correct

✗ 3. Only III is correct

✓ 4. Only I is correct

Question ID : 630680556895
Option 1 ID : 6306802176466
Option 2 ID : 6306802176465
Option 3 ID : 6306802176464
Option 4 ID : 6306802176463
Status : Answered
Chosen Option : 4

Q.6 The passage given below has numbered blanks. Select the most appropriate option to fill in blank number 5.

To avoid the various foolish opinions which mankind holds, no superhuman genius is required. A few simple rules will keep you, not from all error, but from silly error. If the matter is one that can be (1) _____ by observation, make the observation yourself. Aristotle could have avoided the mistake of (2) _____ that women have fewer teeth than men, by the simple device of asking Mrs Aristotle to keep her mouth open while he (3) _____. He did not do so because he thought he knew. Thinking that you know when in fact you don't is a fatal mistake, to which we are all (4) _____. I believe myself that hedgehogs eat black beetles, because I have been told that they do; but if I were writing a book on the habits of hedgehogs, I should not (5) _____ myself until I had seen one enjoying this unappetizing diet. Aristotle, however, was less cautious. Ancient and medieval authors knew all about unicorns and salamanders; not one of them thought it necessary to avoid dogmatic statements about them because he had never seen one of them.

Ans ☒ 1. Commit

☐ 2. Justify

☐ 3. Prove

☐ 4. Write

Question ID : 630680556751

Option 1 ID : 6306802175985

Option 2 ID : 6306802175984

Option 3 ID : 6306802175986

Option 4 ID : 6306802175983

Status : Answered

Chosen Option : 4

Q.7 Select the correct conclusion based on the meaning of the underlined word.

Statement: My parents think that my problems are small potatoes.

Conclusion:

I. His parents take him for granted.

II. His parents find his problems funny.

III. His parents think that his problems are unimportant.

Ans ☐ 1. Only conclusion I and III are correct

☒ 2. Only conclusion III is correct

☐ 3. Only conclusion I and II are correct

☐ 4. Only conclusion I is correct

Question ID : 630680556814

Option 1 ID : 6306802176142

Option 2 ID : 6306802176141

Option 3 ID : 6306802176140

Option 4 ID : 6306802176139

Status : Answered

Chosen Option : 2

Q.8 Select the conclusion(s) that follow(s) based on the correct meaning of the underlined segment in the following sentence.

Sentence:It is not prudent to try to keep up with the Joneses.

Conclusion:

- (i) Most employees are in the good books of their employers by saying 'Yes' to whatever their employers say.
- (ii) As a result, many middle class families are unable to live a debt-free life.
- (iii) People in the community respect the Joneses for their wisdom.

Ans

- 1. Only conclusion (ii)
- 2. Only conclusion (i)
- 3. Only conclusion (i) and (iii)
- 4. Only Conclusion (iii)

Question ID : 630680556762
Option 1 ID : 6306802176028
Option 2 ID : 6306802176027
Option 3 ID : 6306802176030
Option 4 ID : 6306802176029
Status : Answered
Chosen Option : 2

Q.9 Select the conclusion(s) that follow(s) based on the correct meaning of the word underlined in the following sentence.

Sentence: Mahatma Gandhi and Martin Luther King Jr. were altruists.

Conclusion:

- (i) Such people do not desire any personal gain from their service.
- (ii) They are enamoured of public acclaim and glory, though.
- (iii) It is very rare to come across such selfless human beings.

Ans

- 1. Only conclusion (ii) and (iii)
- 2. Only conclusion (ii)
- 3. Only conclusion (i)
- 4. Only conclusion (i) and (iii)

Question ID : 630680556741
Option 1 ID : 6306802175945
Option 2 ID : 6306802175944
Option 3 ID : 6306802175943
Option 4 ID : 6306802175946
Status : Answered
Chosen Option : 3

Q.10 Select the conclusion(s) that follow(s) based on the correct meaning of the word underlined in the following sentence.

Sentence:

Geriatrics has become a specialisation in most countries of the world.**Conclusion:**

- (i) Specialists in this field are in demand as the average lifespan of humans has increased with advances in medicine.
(ii) More and more old-age homes for the destitute have sprung up in and around major cities.
(iii) Care of the elderly has become a serious problem in educated as well as affluent families.

- Ans** ☒ 1. Only conclusion (ii)
☒ 2. Only conclusion (i) and (iii)
☒ 3. Only conclusion (i)
☒ 4. Only conclusion (ii) and (iii)

Question ID : 630680556745
Option 1 ID : 6306802175960
Option 2 ID : 6306802175962
Option 3 ID : 6306802175959
Option 4 ID : 6306802175961
Status : Answered
Chosen Option : 3

Q.11 The sentences given below are numbered 1, 2, 3, 4, and so on. They form a coherent paragraph when sequenced properly. Choose the option that gives the proper sequence.


1. In a formal relationship, on the other hand, feedback is given by an expert, usually an instructor, a more experienced colleague, or a professional editor.
2. Having an editorial relationship is a crucial part of the writing process as it helps in getting feedback on one's writing regularly.
3. No serious writer should go from draft to finished text without editorial assistance.
4. In an informal editorial relationship, peers read and offer feedback to one another about their writing.
5. This is because it is often difficult for a writer to view his or her writing from the perspective of an external reader.


- Ans** ☒ 1. 32541
☒ 2. 23415
☒ 3. 35214
☒ 4. 12543


Question ID : 630680556720
Option 1 ID : 6306802175859
Option 2 ID : 6306802175860
Option 3 ID : 6306802175862
Option 4 ID : 6306802175861
Status : Not Answered
Chosen Option : --


Q.12 Match the following words with their antonyms.

	List I		List II
1	Cautious	A	Reckless
2	Gallant	B	Craven
3	Functional	C	Broken

Ans  1. 1-B, 2-C, 3-A

 2. 1-A, 2-B, 3-C

 3. 1-C, 2-B, 3-A

 4. 1-C, 2-A, 3-B

Question ID : 630680556839

Option 1 ID : 6306802176241

Option 2 ID : 6306802176239

Option 3 ID : 6306802176240

Option 4 ID : 6306802176242

Status : Answered

Chosen Option : 1

Q.13 Select the correct conclusion based on the meaning of the underlined word.

Statement: You always feel exhausted because you put too many irons in the fire.

Conclusion:

I. You try to do too many things at the same time.

II. You want to be the topic of every discussion.

Ans  1. Only conclusion I is correct

 2. Both conclusion I and II are correct

 3. Neither conclusion I nor II is correct

 4. Only conclusion II is correct

Question ID : 630680556824

Option 1 ID : 6306802176179

Option 2 ID : 6306802176181

Option 3 ID : 6306802176182

Option 4 ID : 6306802176180

Status : Answered

Chosen Option : 1

Q.14 Which of the following statements uses the idiom correctly?

(i) For a very long time some of the provisions of the criminal code have remained a dead letter.

(ii) Many new schemes to benefit the poor and the marginalized are announced during election campaigns, but many of them remain a dead letter in implementation.

(iii) The opening of the newest facility in airports was a dead letter day for the flyers.

Ans ☒ 1. Only statements (ii) and (iii)

☒ 2. Only statements (i) and (iii)

☒ 3. Only statements (i) and (ii)

☒ 4. All the statements

Question ID : 630680556753

Option 1 ID : 6306802175993

Option 2 ID : 6306802175992

Option 3 ID : 6306802175991

Option 4 ID : 6306802175994

Status : Answered

Chosen Option : 3

Q.15 Identify the grammatically correct form of the given sentence.

Sentence: Why are you coming off the children in my family?

I. Why you are coming for the children in my family?

II. Why are you coming after the children in my family?

III. Why are you coming after the children at family?

Ans ☒ 1. Only I and II are correct

☒ 2. Only I is correct

☒ 3. Only II is correct

☒ 4. Only I and III are correct

Question ID : 630680556884

Option 1 ID : 6306802176422

Option 2 ID : 6306802176419

Option 3 ID : 6306802176420

Option 4 ID : 6306802176421

Status : Answered

Chosen Option : 3

Q.16 The five sentences labelled (1, 2, 3, 4, 5) given in this question. The last sentence is fixed and others when properly sequenced, form a coherent paragraph. Each sentence is labelled with a number. Decide on the proper order for the sentences and choose the correct option.

1. Soon afterwards, a dinner was hosted in the Crystal Ballroom of the Biltmore Hotel in downtown Los Angeles.
2. The Academy of Motion Picture Arts and Science was founded in 1927.
3. The main motto of this meeting was to discuss the new organisation's aims and goals.
4. While there were numerous pints that were discussed that night, one of the prime objectives that were talked about was to provide a way for recognising the excellent achievements in the field of motion picture production.
5. This would, in turn, become a driving force for people to achieve better levels of quality when it comes to cinema.

Ans ☒ 1. 21345
☐ 2. 12345
☐ 3. 34125
☐ 4. 43125

Question ID : 630680556809
Option 1 ID : 6306802176121
Option 2 ID : 6306802176120
Option 3 ID : 6306802176122
Option 4 ID : 6306802176119
Status : Not Answered
Chosen Option : --

Q.17 Four sentences are given as options. Choose the option that contains the odd sentence.

Ans ☐ 1. I would like to be considered for the post of service engineer in your company.
☒ 2. I have a fair complexion, short hair and a smiling face, which my friends like about me.
☐ 3. I have been working as a supervisor in a manufacturing company for four years.
☐ 4. I have a BE degree in mechanical engineering from Anna University.

Question ID : 630680556710
Option 1 ID : 6306802175821
Option 2 ID : 6306802175822
Option 3 ID : 6306802175820
Option 4 ID : 6306802175819
Status : Answered
Chosen Option : 2

Q.18 Identify the grammatically correct form of the given sentence.

Sentence: Carbon inequality is an measure of the difference in carbon pollution across society.

- I. Carbon inequality is a measure of the difference in carbon pollution across society.
- II. Carbon inequality is a measure of an difference in carbon pollution across society.

Ans ☐ 1. Neither I nor II is correct
☐ 2. Only II is correct
☒ 3. Only I is correct
☐ 4. Both I and II are correct

Question ID : 630680556868
Option 1 ID : 6306802176358
Option 2 ID : 6306802176356
Option 3 ID : 6306802176355
Option 4 ID : 6306802176357
Status : Answered
Chosen Option : 3

Q.19 Match the following words with their antonyms.

	List I		List II
1	Gullible	A	Protection
2	Jeopardy	B	Suspicious
3	Teensy	C	Giant

Ans ☒ 1. 1-B, 2-C, 3-A

☒ 2. 1-B, 2-A, 3-C

☒ 3. 1-C, 2-B, 3-A

☒ 4. 1-A, 2-B, 3-C

Question ID : 630680556843

Option 1 ID : 6306802176257

Option 2 ID : 6306802176258

Option 3 ID : 6306802176256

Option 4 ID : 6306802176255

Status : Answered

Chosen Option : 3

Q.20 Select the option in which the word 'nadir' is used correctly.

Ans ☒ 1. The nadir of a man's life comes when he feels happy about his selfless service to mankind.

☒ 2. The Sahitya Academy Award was announced in recognition of the nadir in the writer's literary achievements.

☒ 3. Tenzing Norgay reached the nadir of the Everest summit and created history.

☒ 4. The recent court ruling sentencing the politician on criminal charges marked the nadir in his political career.

Question ID : 630680556740

Option 1 ID : 6306802175942

Option 2 ID : 6306802175940

Option 3 ID : 6306802175939

Option 4 ID : 6306802175941

Status : Answered

Chosen Option : 1